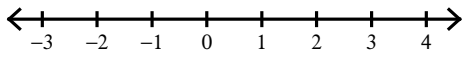


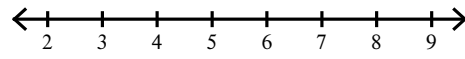
One-Step Inequalities

Solve each inequality and graph its solution.

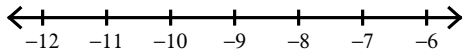
1) $-3 > -3 + k$



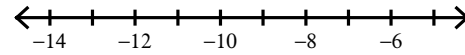
2) $-9 + x \leq -2$



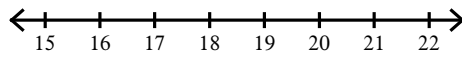
3) $-3 \leq x + 5$



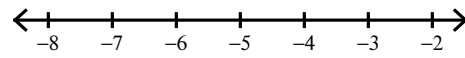
4) $-13 \geq n - 4$



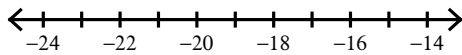
5) $24 \leq p + 7$



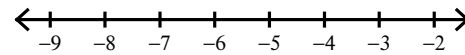
6) $9 \leq x + 15$



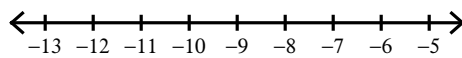
7) $k + 20 < 1$



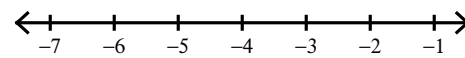
8) $16 + a \leq 10$



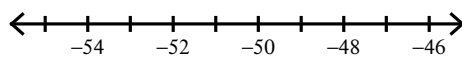
9) $-4 \geq \frac{n}{2}$



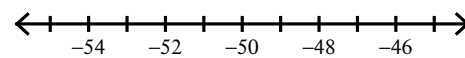
10) $\frac{b}{2} > -2$



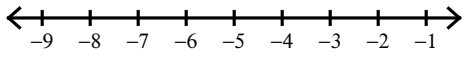
11) $\frac{a}{10} \leq -5$



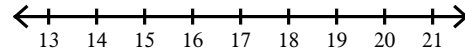
12) $-10 > \frac{n}{5}$



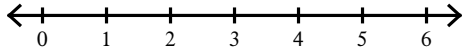
$$13) \frac{x}{3} \geq -2$$



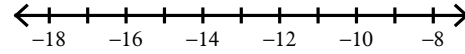
$$14) 8k \leq 144$$



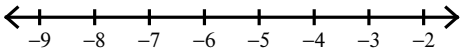
$$15) 4b \leq 16$$



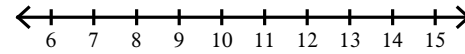
$$16) -143 > 11m$$



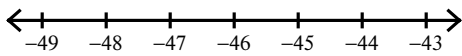
$$17) -9 \geq x - 3$$



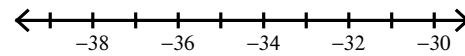
$$18) 9r \geq 90$$



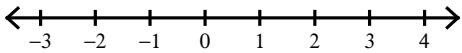
$$19) \frac{m}{5} \geq -9$$



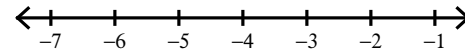
$$20) \frac{n}{5} < -7$$



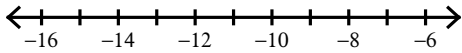
$$21) 8x \geq 16$$



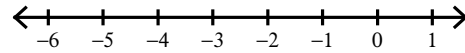
$$22) 27 \geq -9r$$



$$23) -22 \geq n - 11$$



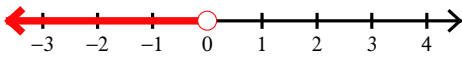
$$24) 16 \geq -4v$$



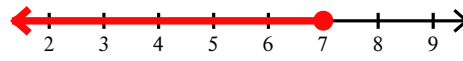
One-Step Inequalities

Solve each inequality and graph its solution.

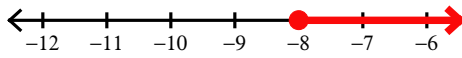
1) $-3 > -3 + k$



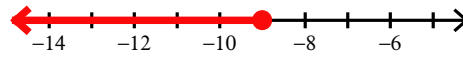
2) $-9 + x \leq -2$



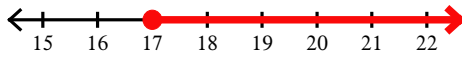
3) $-3 \leq x + 5$



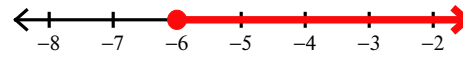
4) $-13 \geq n - 4$



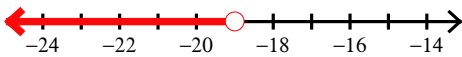
5) $24 \leq p + 7$



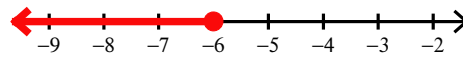
6) $9 \leq x + 15$



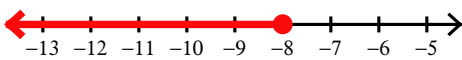
7) $k + 20 < 1$



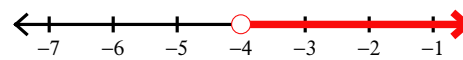
8) $16 + a \leq 10$



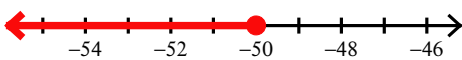
9) $-4 \geq \frac{n}{2}$



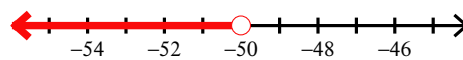
10) $\frac{b}{2} > -2$



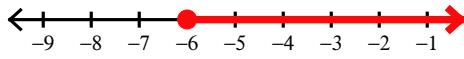
11) $\frac{a}{10} \leq -5$



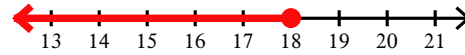
12) $-10 > \frac{n}{5}$



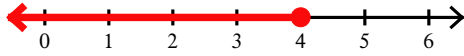
$$13) \frac{x}{3} \geq -2$$



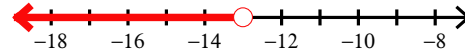
$$14) 8k \leq 144$$



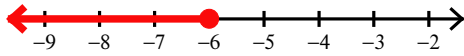
$$15) 4b \leq 16$$



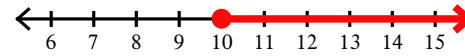
$$16) -143 > 11m$$



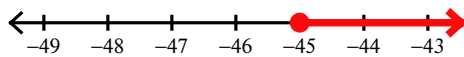
$$17) -9 \geq x - 3$$



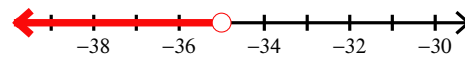
$$18) 9r \geq 90$$



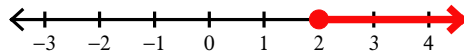
$$19) \frac{m}{5} \geq -9$$



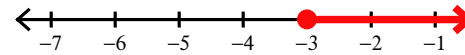
$$20) \frac{n}{5} < -7$$



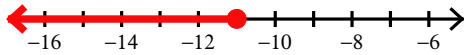
$$21) 8x \geq 16$$



$$22) 27 \geq -9r$$



$$23) -22 \geq n - 11$$



$$24) 16 \geq -4v$$

